



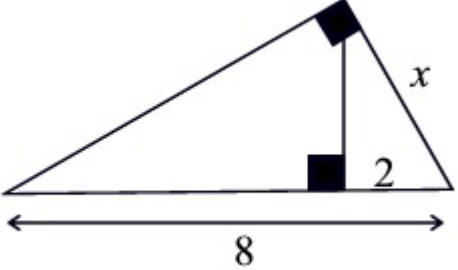
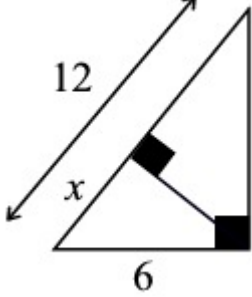
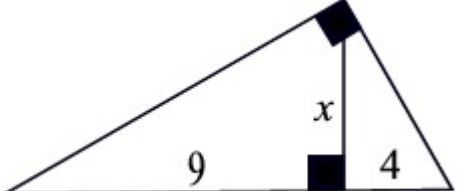
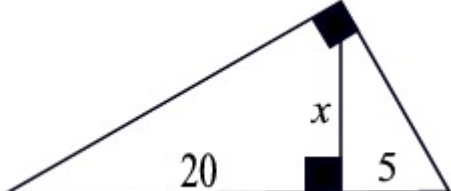
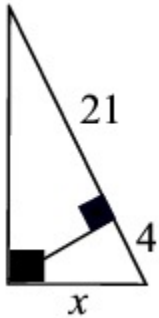
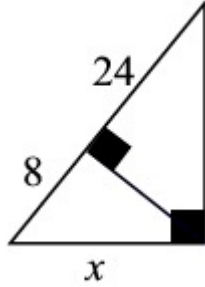
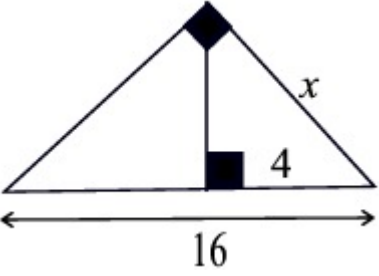
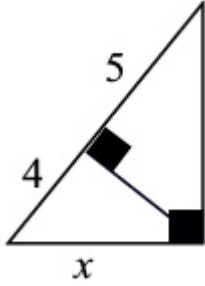
# Mean Twisters

(Mean Proportional)

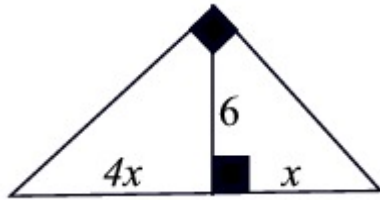
Name \_\_\_\_\_

Name \_\_\_\_\_

**Directions:** You and your partner will work together to solve these right triangle related problems. You solve the problems on the left and your partner will solve the problems on the right. When you are done, your answers will match - but the answers are NOT in the same order in both columns.

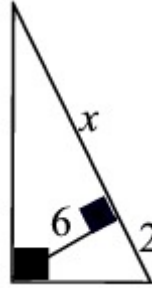
<p>1.</p>  <p>Find <math>x</math>.</p>	<p>1.</p>  <p>Find <math>x</math>.</p>
<p>2.</p>  <p>Find <math>x</math>.</p>	<p>2.</p>  <p>Find <math>x</math>.</p>
<p>3.</p>  <p>Find <math>x</math>.</p>	<p>3.</p>  <p>Find <math>x</math>.</p>
<p>4.</p>  <p>Find <math>x</math>.</p>	<p>4.</p>  <p>Find <math>x</math>.</p>

5.



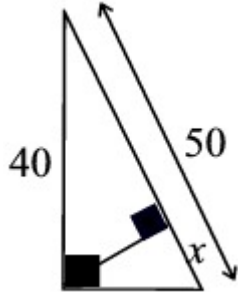
Find  $x$ .

5.



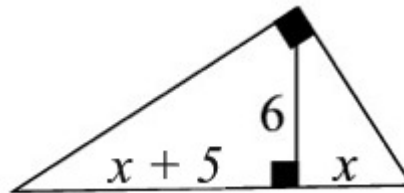
Find  $x$ .

6.



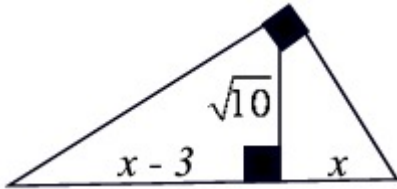
Find  $x$ .

6.



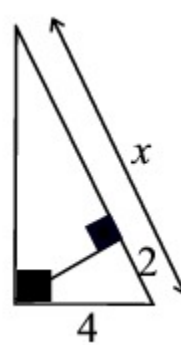
Find  $x$ .

7.



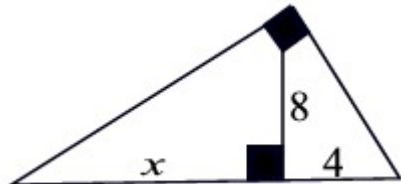
Find  $x$ .

7.



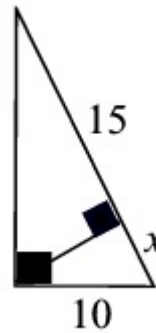
Find  $x$ .

8.



Find  $x$ .

8.



Find  $x$ .